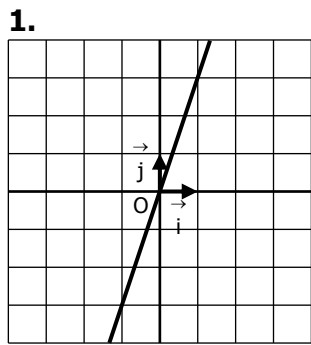
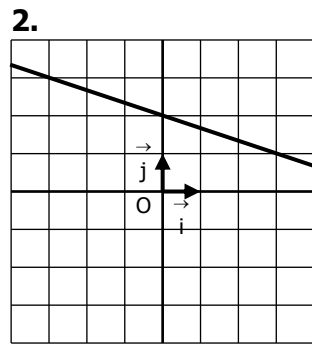


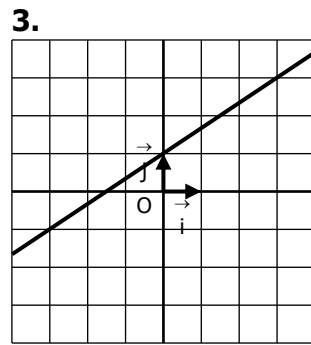
Déterminer graphiquement l'expression de la fonction affine dont on a tracé la courbe :



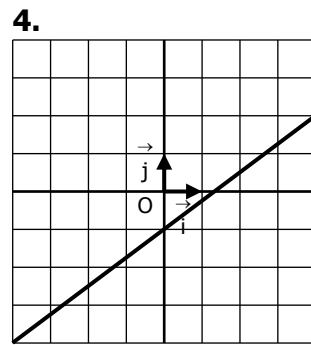
$f(x) = \dots\dots\dots$



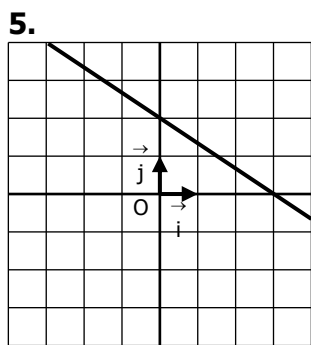
$f(x) = \dots\dots\dots$



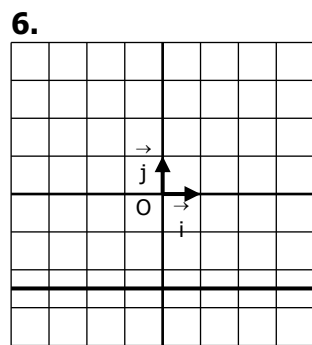
$f(x) = \dots\dots\dots$



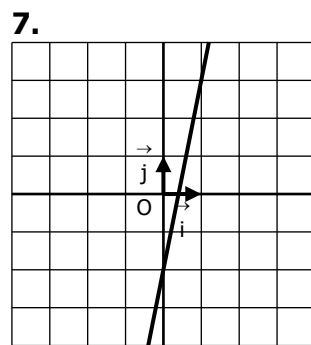
$f(x) = \dots\dots\dots$



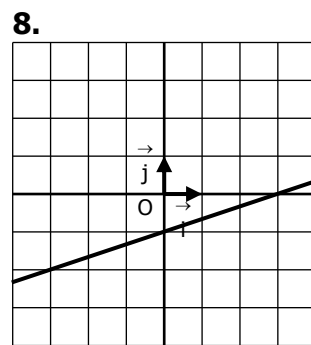
$f(x) = \dots\dots\dots$



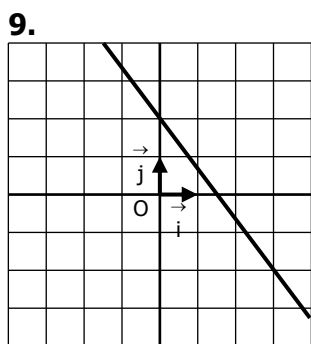
$f(x) = \dots\dots\dots$



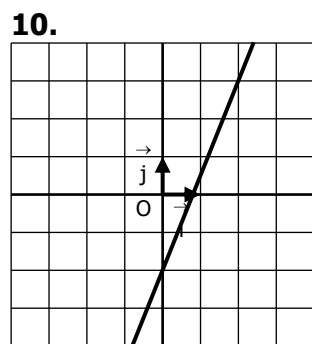
$f(x) = \dots\dots\dots$



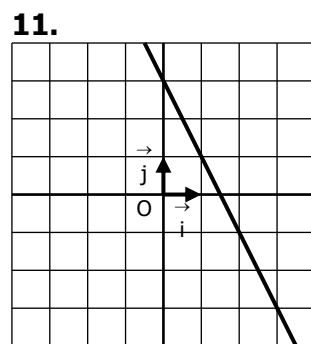
$f(x) = \dots\dots\dots$



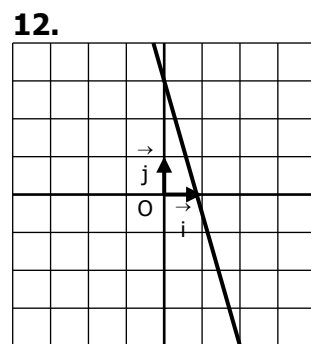
$f(x) = \dots\dots\dots$



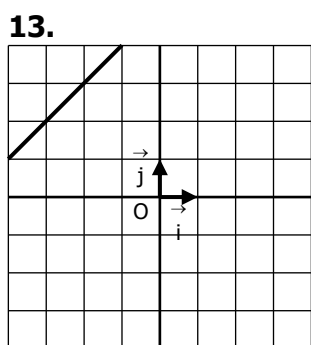
$f(x) = \dots\dots\dots$



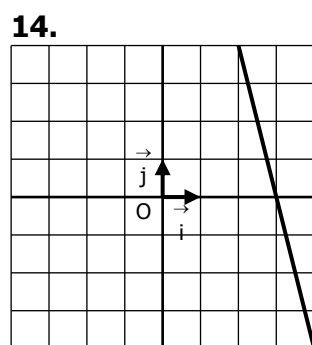
$f(x) = \dots\dots\dots$



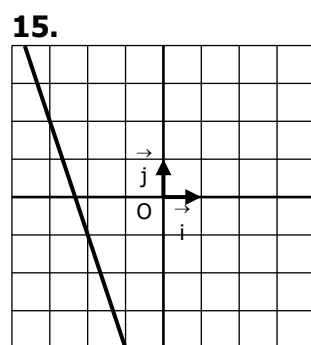
$f(x) = \dots\dots\dots$



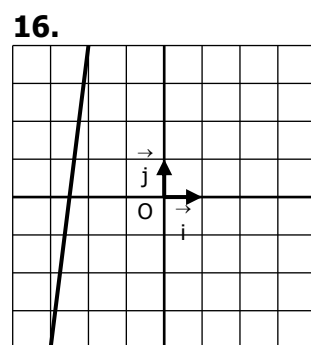
$f(x) = \dots\dots\dots$



$f(x) = \dots\dots\dots$



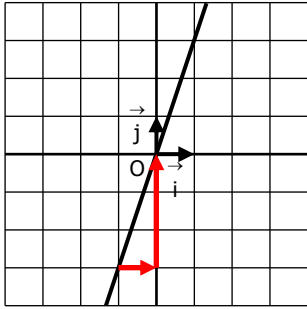
$f(x) = \dots\dots\dots$



$f(x) = \dots\dots\dots$

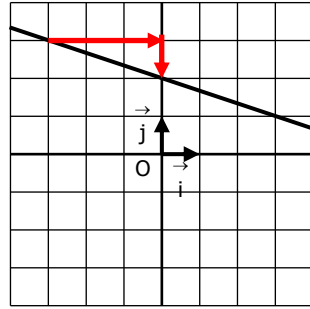
## CORRIGE – Notre Dame de La Merci – Montpellier

1.



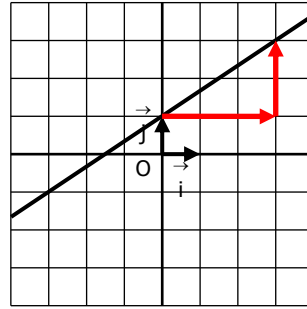
$$f(x) = 3x$$

2.



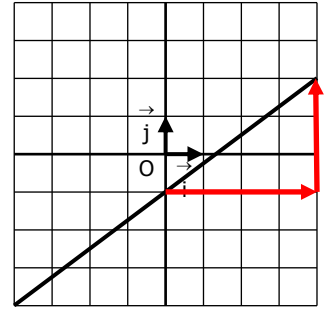
$$f(x) = -\frac{1}{3}x + 2$$

3.



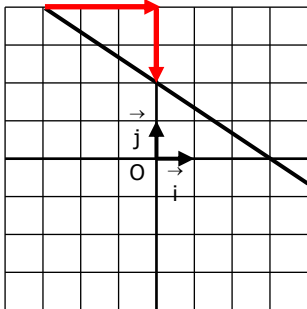
$$f(x) = \frac{2}{3}x + 1$$

4.



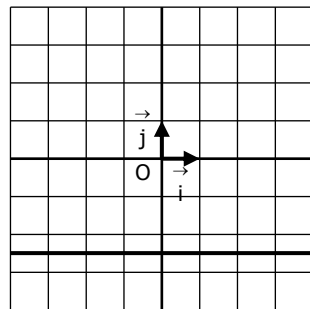
$$f(x) = \frac{3}{4}x - 1$$

5.



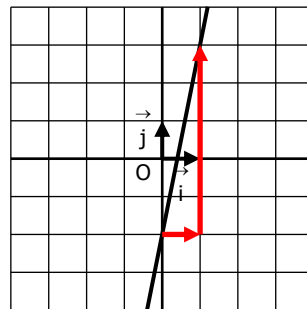
$$f(x) = -\frac{2}{3}x + 2$$

6.



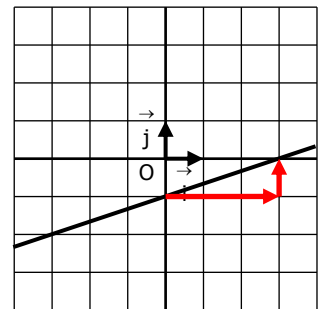
$$f(x) = -2,5$$

7.



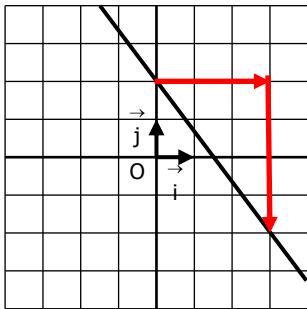
$$f(x) = 5x - 2$$

8.



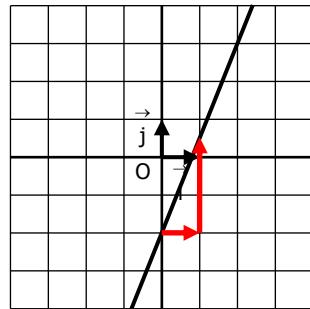
$$f(x) = \frac{1}{2}x - 1$$

9.



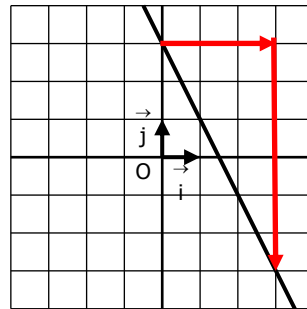
$$f(x) = -\frac{4}{3}x + 2$$

10.



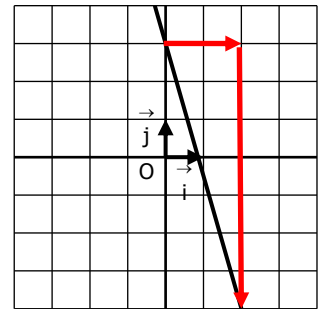
$$f(x) = 2,5x - 2$$

11.



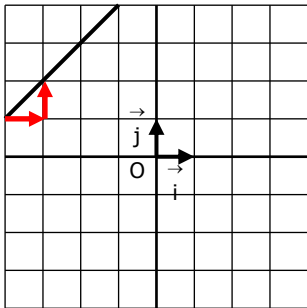
$$f(x) = -2x + 3$$

12.



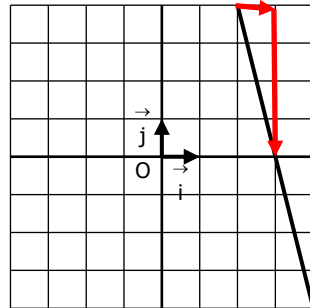
$$f(x) = -3,5x + 3$$

13.



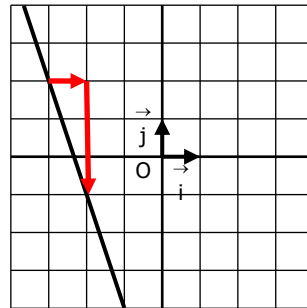
$$f(x) = x + 5$$

14.



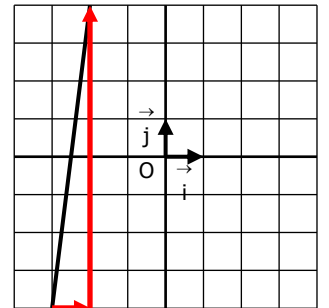
$$f(x) = -4x + 12$$

15.



$$f(x) = -3x - 7$$

16.



$$f(x) = 8x + 20$$